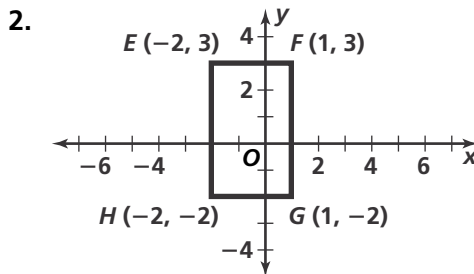
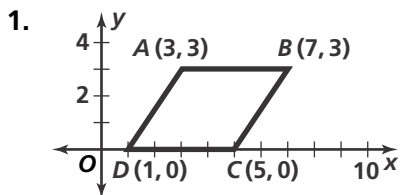


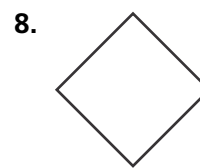
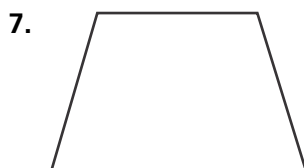
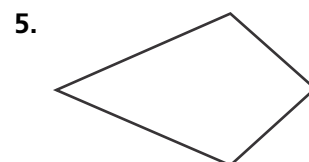
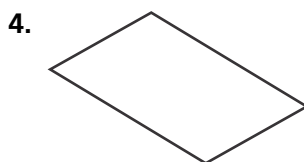
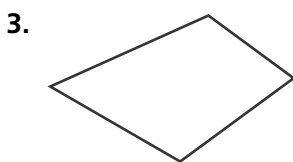
# Practice 6-1

## Classifying Quadrilaterals

Determine the most precise name for each quadrilateral.

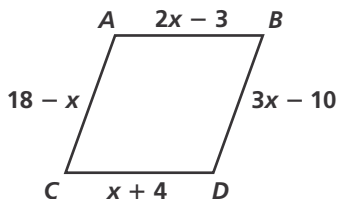


Judging by appearance, classify each quadrilateral in as many ways as possible.

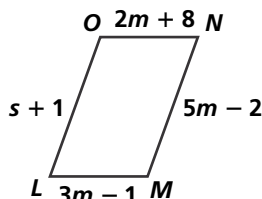


**Algebra** Find the values of the variables. Then find the lengths of the sides of each quadrilateral.

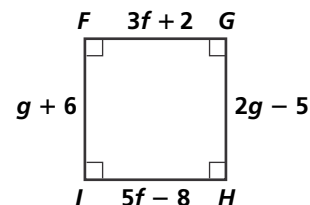
9. rhombus  $ABDC$



10. parallelogram  $LONM$



11. square  $FGHI$



Determine the most precise name for each quadrilateral with the given vertices.

12.  $A(1, 4), B(3, 5), C(6, 1), D(4, 0)$

13.  $W(0, 5), X(3, 5), Y(3, 1), Z(0, 1)$

14.  $A(-2, 4), B(2, 6), C(6, 4), D(2, -3)$

15.  $P(-1, 0), Q(-1, 3), R(2, 4), S(2, 1)$